

Name:

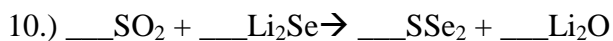
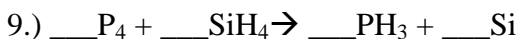
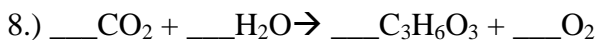
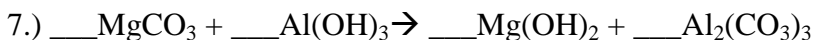
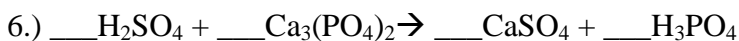
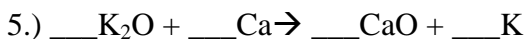
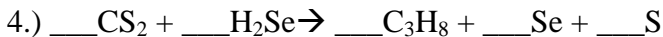
Block #:

Date:

Balancing Equations Worksheet #3

Using what you have learned, balance the following equations.

You have three attempts to give me a perfect paper. If after three attempts your paper is still not completely correct, your grade for this activity will be lowered one point for every equation that is incorrect.



Number incorrect:

Attempt 1: _____

Attempt 2: _____

Attempt 3: _____ teacher initial when finished: _____

All correct on first try gets extra credit

Name:

Block #:

Date:

Balancing Equations Worksheet #4

